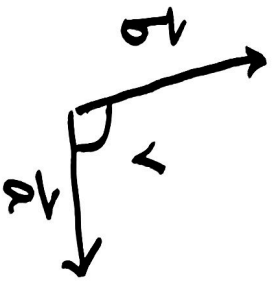


06.02.23

13.1-4 Skalarprodukt

$\vec{a} \cdot \vec{b}$ skalar (Pilkprodukt)



$$\vec{a} \cdot \vec{b} = |\vec{a}| \cdot |\vec{b}| \cdot \cos v$$

$$\vec{a} \cdot \vec{b} = \vec{b} \cdot \vec{a} \quad \text{symmetrisk}$$

$$0 \leq v \leq \pi$$

$$-|\vec{a}||\vec{b}| \leq \vec{a} \cdot \vec{b} \leq |\vec{a}||\vec{b}|$$

Skalarproduktet er lineært i begge vektorerne

$$\vec{a} \cdot \vec{b} = -3$$

Hva er vinkelen

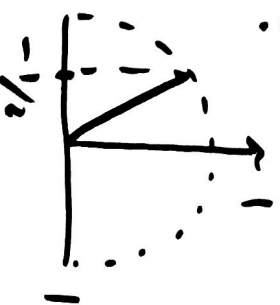
mellem \vec{a} og \vec{b} ?

$$|\vec{a}| = 2$$

$$|\vec{b}| = 3$$

$$\cos v = \frac{\vec{a} \cdot \vec{b}}{|\vec{a}||\vec{b}|} = \frac{-3}{2 \cdot 3} = -\frac{1}{2}$$

$$v = \arccos\left(-\frac{1}{2}\right) = \underline{\underline{\frac{2\pi}{3}}} \quad (120^\circ)$$



oppgave

$$|\vec{a}| = 2$$

$$|\vec{b}| = 3$$

Hva kan vi si om vinkelen
(vinkelen mellom de)

hvis

$$\vec{a} \cdot \vec{b} = 6 (= |\vec{a}| \cdot |\vec{b}|)$$

$$v = 0$$

$$v = \pi$$

$$v = \pi/2$$

$$\frac{\pi}{2} < v < \pi$$

$$\vec{a} \cdot \vec{b} = -6$$

$$\vec{a} \cdot \vec{b} = 0$$

$$\vec{a} \cdot \vec{b} < 0$$

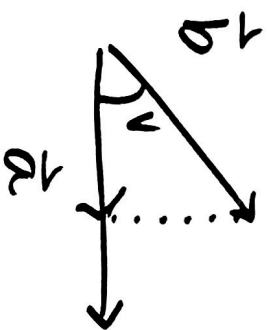
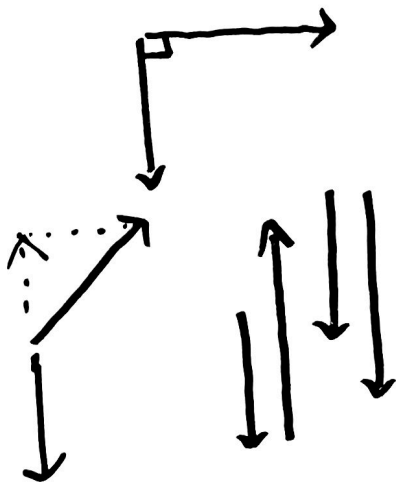
$$\vec{a} \cdot \vec{b} = 7$$

$$\vec{a} \cdot \vec{b} = 1$$

ikke mulig

$$\cos v = \frac{1}{6}$$

$$v = \arccos\left(\frac{1}{6}\right) = 80.406^\circ \sim 1.403 \text{ rad.}$$



$$\frac{\vec{a} \cdot \vec{b}}{|\vec{a}|}$$

lengden til komponenten
til \vec{b} langs \vec{a} ,

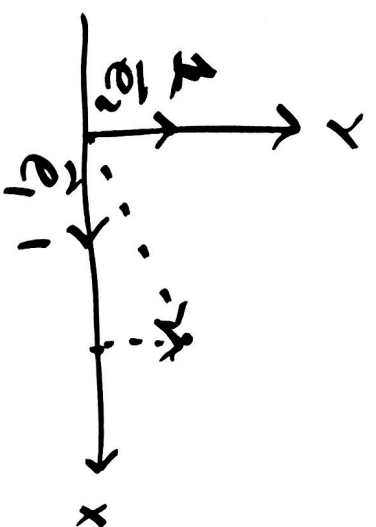
med fortegn

+ hvis samme retning

- hvis motsatt retning.

Skalarprodukt in Koordinatenform

$$\begin{aligned} [x, y] &= x \vec{e}_1 + y \vec{e}_2 \\ &= x [1, 0] + y [0, 1] \end{aligned}$$



$$\begin{aligned} \vec{e}_1 \cdot \vec{e}_1 &= |\vec{e}_1|^2 = 1 \\ \vec{e}_2 \cdot \vec{e}_2 &= |\vec{e}_2|^2 = 1 \end{aligned}$$

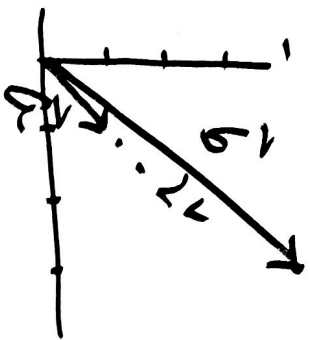
$$\vec{e}_1 \cdot \vec{e}_2 = \vec{e}_2 \cdot \vec{e}_1 = 0$$

$$\begin{aligned} [x_1, y_1] \cdot [x_2, y_2] &= (x_1 \vec{e}_1 + y_1 \vec{e}_2) \cdot (x_2 \vec{e}_1 + y_2 \vec{e}_2) \\ &= \underbrace{x_1 x_2 \vec{e}_1 \cdot \vec{e}_1}_1 + \underbrace{x_1 y_2 \vec{e}_1 \cdot \vec{e}_2}_0 + \underbrace{y_1 x_2 \vec{e}_2 \cdot \vec{e}_1}_0 + \underbrace{y_1 y_2 \vec{e}_2 \cdot \vec{e}_2}_1 \\ &= x_1 \cdot x_2 + y_1 \cdot y_2 \end{aligned}$$

$$[3, 4] \cdot [1, 1] = 3 \cdot 1 + 4 \cdot 1 = 7$$

$$\cos v = \frac{\vec{a} \cdot \vec{b}}{|\vec{a}| \cdot |\vec{b}|} = \frac{7}{\sqrt{9+4} \cdot \sqrt{1+1}} = \frac{7}{5\sqrt{2}}$$

$$v = \arccos\left(\frac{7}{5\sqrt{2}}\right) = 8.13^\circ$$



Oppg. Finn skalarproduktet mellom

$$\vec{a} = [1, 2]$$

$$\vec{b} = [2, 1]$$

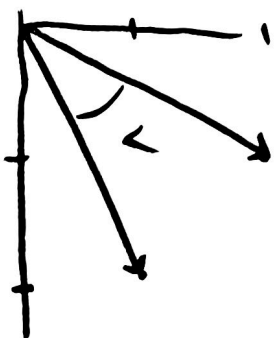
og vinkelen mellom dem.

$$\vec{a} \cdot \vec{b} = [1, 2] \cdot [2, 1] = 1 \cdot 2 + 2 \cdot 1 = 4$$

$$|\vec{a}| = |\vec{b}| = \sqrt{1+4} = \sqrt{5}$$

$$\cos v = \frac{4}{\sqrt{5} \cdot \sqrt{5}} = \frac{4}{5} = 0.8$$

$$v = \arccos(0.8) = \underline{\underline{36.87^\circ}}$$



Når er $[2, 3]$ og $[5, s+1]$ ortogonale?
 \vec{a} \vec{b}

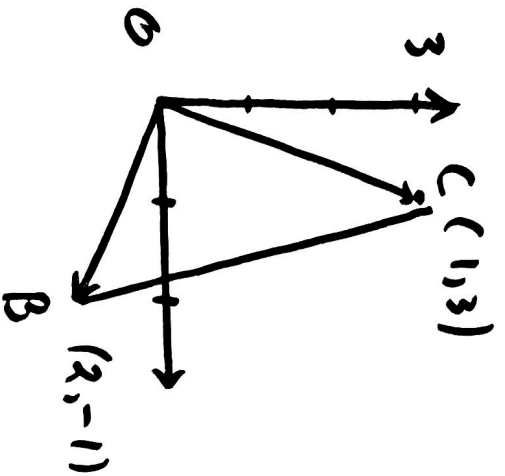
Det sker når $\vec{a} \cdot \vec{b} = 0$

$$[2, 3] \cdot [5, s+1] = 2s + 3(s+1) = 0$$
$$= 5s + 3 = 0$$

Så vektorerne \vec{a} og \vec{b} er
ortogonale når $s = \frac{-3}{5} = \underline{\underline{-0.6}}$

$[a, b]$ og $[b, -a]$ er ortogonale vektorer.
 $[-b, a]$

Find vinklene til trekanen



$$\vec{OB} = [2, -1]$$

$$\vec{OC} = [1, 3]$$

$$\cos(\angle O) = \frac{\vec{OB} \cdot \vec{OC}}{|\vec{OB}| \cdot |\vec{OC}|}$$

$$= \frac{2 \cdot 1 - 3}{\sqrt{5} \sqrt{10}} = \frac{-1}{\sqrt{5} \sqrt{2.5}} = \frac{-1}{5\sqrt{2}}$$

$$\angle O = 98.13^\circ$$

$$\cos(\angle B) = \frac{\vec{BO} \cdot \vec{BC}}{|\vec{BO}| \cdot |\vec{BC}|}$$

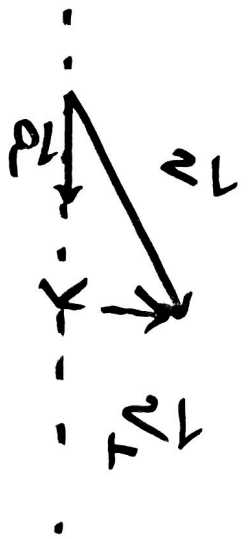
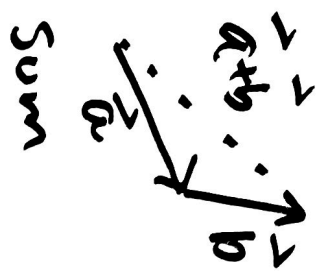
$$= \frac{2+4}{\sqrt{5} \sqrt{17}}$$

$$\vec{BO} = -\vec{OB} = [-2, 1]$$

$$\vec{BC} = \vec{OC} - \vec{OB} = [-1, 4]$$

$$\angle B = \arccos \frac{6}{\sqrt{85}} = 49.40^\circ$$

$$\angle C = 180^\circ - \angle O - \angle B = \underline{32.47^\circ}$$

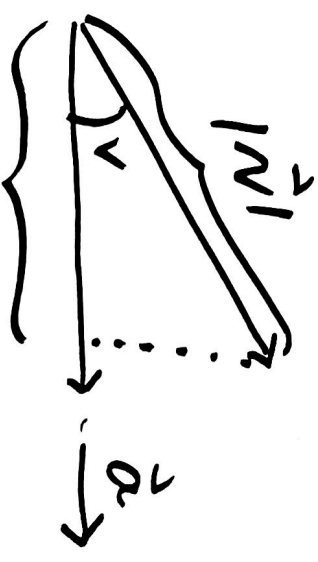


$$\vec{v} = \vec{v}_{||} + \vec{v}_{\perp}$$

komponenten
ki \vec{v} langs \vec{a}

$$\vec{v}_{||} = \frac{\vec{v} \cdot \vec{a}}{|\vec{a}|^2} \vec{a}$$

$$\vec{v}_{\perp} = \vec{v} - \vec{v}_{||}$$



$$\vec{v}_{||} = \frac{\vec{v} \cdot \vec{a}}{|\vec{a}|} \cdot \frac{\vec{a}}{|\vec{a}|}$$

reningen
ki \vec{a}

$$\vec{v} = [3, 4]$$

$$\vec{a} = [1, 1]$$

Finna komponenten til \vec{v} langs \vec{a} og vinkelrett på \vec{a}

$$\vec{v}_{||} = \frac{\vec{a} \cdot \vec{v}}{|\vec{a}|^2} \vec{a} = \frac{3+4}{1+1} [1, 1] = \frac{7}{2} [1, 1]$$

$$\vec{v}_{\perp} = \vec{v} - \vec{v}_{||} = [3, 4] - (3.5) [1, 1] = [-0.5, 0.5] = \frac{1}{2} [-1, 1]$$

Opp $\vec{v} = [5, 2]$ $\vec{a} = [-3, 2]$

Finna $\vec{v}_{||}$ og \vec{v}_{\perp}

$$\vec{v}_{||} = \frac{\vec{v} \cdot \vec{a}}{|\vec{a}|^2} \vec{a} = \frac{-15+4}{9+4} [-3, 2] = \frac{-11}{13} [-3, 2]$$
$$= \left[\frac{33}{13}, -\frac{22}{13} \right] \sim [2.538, -1.692]$$

$$\vec{v} - \vec{v}_n = [5, 2] - \left[\frac{23}{13}, -\frac{22}{13} \right]$$

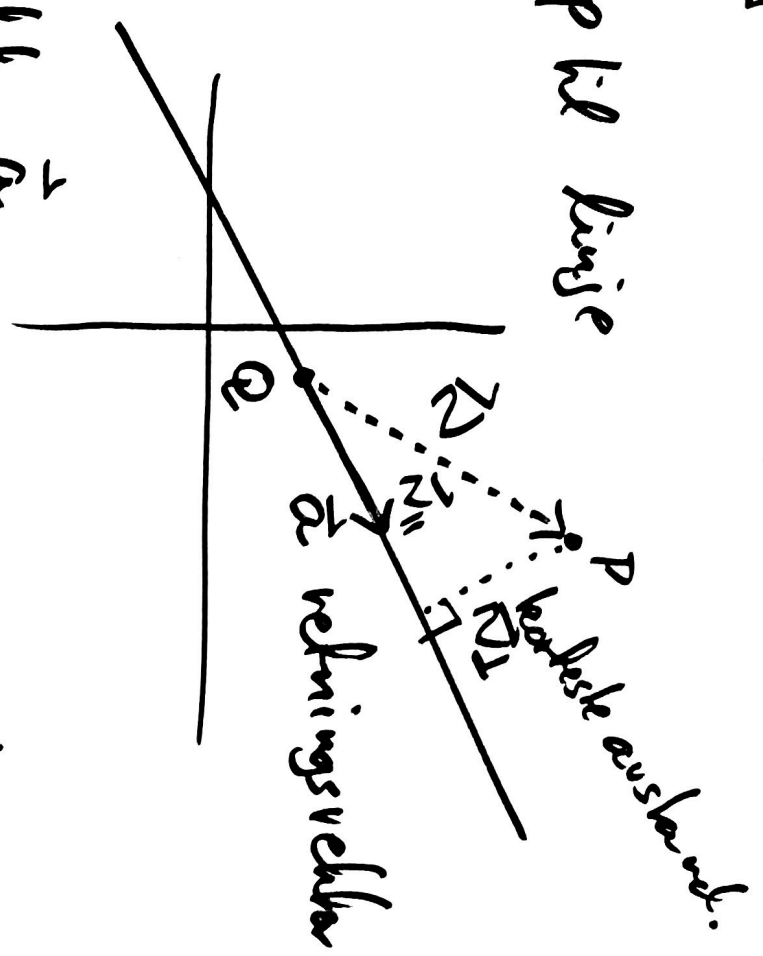
$$= \frac{1}{13} [\underbrace{65 - 23}_{32}, 26 - (-22)]$$

$$= \frac{1}{13} [32, 48]$$

$$\vec{v}_n = \frac{1}{13} [32, 48] \sim [2.461, 3.692]$$

Korteste afstand fra punkt P til linje
 er lik $|\vec{v}_n|$
 hvor \vec{a} retningsvektor

$$\vec{v} = \vec{Q}P$$



Linje givens også m. retningsvektor \vec{a}

$$\vec{Q}P = \vec{v}$$

Punkt P

$$P(5, 2) \text{ og } \vec{a} = [-3, 2]$$

Korteste afstand $|\vec{v}_n|$

$$|\vec{v}_n| = \frac{1}{13} |[2, 3]| = \frac{16}{13}$$

14a) $\sqrt{3} \sin V + \cos V > 0$ $V \in [0, 2\pi]$

1) $\cos V = 0$ $\sin V = \pm 1$ | solving for $\sin V = 1$: $V = \frac{\pi}{2}$

$\cos V \neq 0$ deber med $\cos V$:

2) $\cos V > 0$ $\sqrt{3} \tan V + 1 > 0 \Leftrightarrow \tan V > -\frac{1}{\sqrt{3}}$

3) $\cos V < 0$ $\sqrt{3} \tan V + 1 < 0 \Leftrightarrow \tan V < -\frac{1}{\sqrt{3}}$

